



9課/Lesson 9/Leksyon 9

ようごとぶん / Words and phrases / Mga Salita

ようご	Words	Mga salita
ここ	here	dito
いれかえる	change	palitan; ibahin
おなじ	same	pareho

ぶん	Phrases	Grupo ng mga salita
ここを いれかえても、 こたえは おなじに なります。	If we change the numbers here, the answer remains the same.	Kahit magpalit ang pagkakasunud-sunod ng mga bilang, ang sagot ay hindi mag-iiba.



## 9課/Lesson 9 /Leksyon 9

### 【内容】Contents / Mga Nilalaman

① 掛け算では掛ける数と掛けられる数とを入れ替えても答えは同じであること（乗法の交換法則）を理解する。

① To understand, in a multiplication, (that) even if we change the order of multiplicand and multipliers, the answer remains same (commutative law of multiplication).

① Ang pag-unawa sa konsepto ng multiplication na kahit magkapalit ang mga multiplier at multiplied, ang sagot ay hindi mag-iiba (commutative law of multiplication).

### 【日本語の表現】Math Expressions in Japanese / Mga Math Expressions sa Japanese

① 「入れ替えても（答えは）同じ」

① 「IREKAETEMO (KOTAEWA) ONAJI」  
[Even if we change the order of the numbers, the answer will be the same]

① 「IREKAETEMO (KOTAEWA) ONAJI」  
[Kahit magpalit ang pagkakasunud-sunod ng mga bilang ang sagot ay hindi mag-iiba]

# 9 いれかえても おなじ

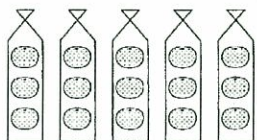
irekaetemo

onaji

乗法の交換法則の発見

1

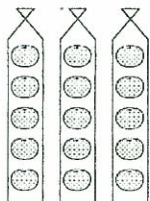
①



3こずつ 5ふくろぶんで  
Sanko zutsu gofukuro bun de  
みかんは なんこになりますか。  
mikan wa nanko ni narimasuka.

$$\square \times \square = \square$$

②




5こずつ 3ふくろぶんで  
Goko zutsu sanfukuro bun de  
みかんは なんこになりますか。  
mikan wa nanko ni narimasuka.

$$\square \times \square = \square$$

Kakezan dewa koko o irekaetemo,  
かけざんでは ここを いれかえても、

$$3 \times 5 = 15$$

$$5 \times 3 = 15$$



おなじ  
onaji

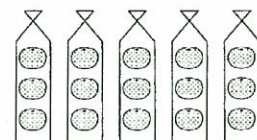
こたえは おなじです。  
kotae wa onajidesu.

# 9 Even if we change the order of numbers (being multiplied), an answer remains same. Kahit magpalit ang pagkakasunod-sunod ng mga bilang, ang sagot ay hindi mag-iiba.

乗法の交換法則の発見

1

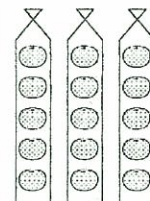
①



There are 3 oranges each in 5 bags. How many oranges are there?  
May tig-3 dalanda sa 5 supot. Ilan lahat ang dalanda?

$$\square \times \square = \square$$

②



There are 5 oranges each inside 3 bags. How many oranges are there?  
May tig-5 dalanda sa 3 supot. Ilan lahat ang dalanda?


$$\square \times \square = \square$$

In multiplication, even if we change the order of these numbers,

Sa multiplication, kahit magpalit ang pagkakasunod-sunod nitong mga bilang

$$3 \times 5 = 15$$

$$5 \times 3 = 15$$



the same  
pareho,  
magkatulad

the answer remains the same.  
Ang sagot ay hindi mag-iiba.

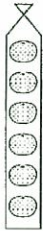
2

①



3 こずつ 6 ふくろぶんで  
Sanko zutsu rokufukuro bun de  
みかんは なんこになりますか。  
mikan wa nanko ni narimasuka.

②



6 こずつ 3 ふくろぶんで  
Rokko zutsu sanfukuro bun de  
みかんは なんこになりますか。  
mikan wa nanko ni narimasuka.

2

①



There are 3 oranges each in 6 bags. How many oranges are there?  
May tig-3 dalandan sa 6 na supot. Ilan lahat ang dalandan?

②

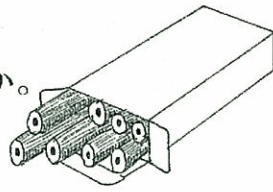


There are 6 oranges each in 3 bags. How many oranges are there?  
May tig-6 na dalandan sa 3 supot. Ilan lahat ang dalandan?

3

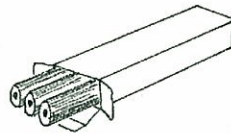
①

8 ぼんずつ 3 はこぶんで  
Happon zutsu sanhako bun de  
えんぴつは なんぼんになりますか。  
enpitsu wa nanbon ni narimasuka.



②

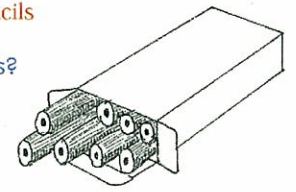
3 ぼんずつ 8 はこぶんで  
Sanbon zutsu hachihako bun de  
えんぴつは なんぼんになりますか。  
enpitsu wa nanbon ni narimasuka.



3

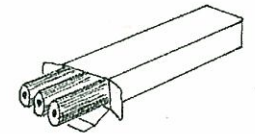
①

There are 8 pencils each in 3 boxes. How many pencils are there?  
May tig-8 lapis sa 3 kaha. Ilan lahat ang mga lapis?



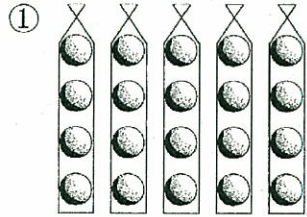
②

There are 3 pencils each in 8 boxes. How many pencils are there?  
May tig-3 lapis sa 8 kaha. Ilan lahat ang mga lapis?



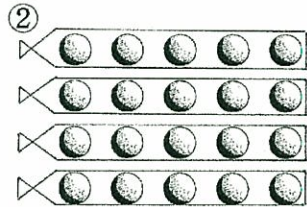
4

配列図による乗法の交換法則の確認



なんこずつ なんふくろぶんで  
 Nanko zutsu nanfukuro bun de  
 なんこ ありますか。  
 nanko arimasuka.

$$\square \times \square = \square$$

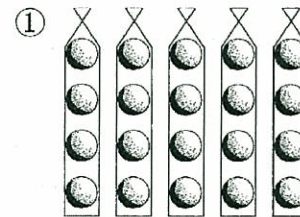


なんこずつ なんふくろぶんで  
 Nanko zutsu nanfukuro bun de  
 なんこ ありますか。  
 nanko arimasuka.

$$\square \times \square = \square$$

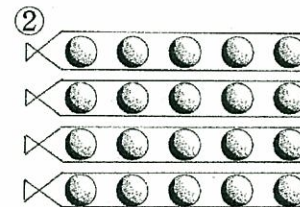
4

配列図による乗法の交換法則の確認



How many objects each in how many bags will  
 make how many?  
 Tig-ilang bagay sa ilang supot ay magiging  
 ilan lahat?

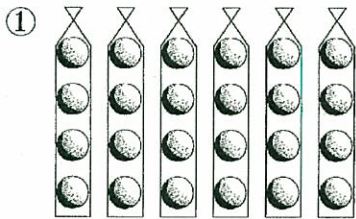
$$\square \times \square = \square$$



How many objects each in how many bags will  
 make how many?  
 Tig-ilang bagay sa ilang supot ay magiging  
 ilan lahat?

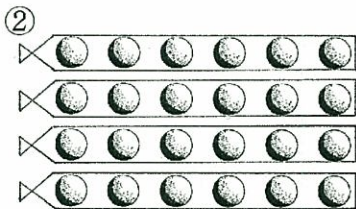
$$\square \times \square = \square$$

5



なんこずつ なんふくろぶんで  
 Nanko zutsu nanfukuro bun de  
 なんこ ありますか。  
 nanko arimasuka.

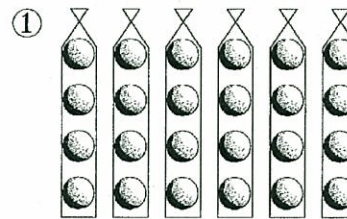
$$\square \times \square = \square$$



なんこずつ なんふくろぶんで  
 Nanko zutsu nanfukuro bun de  
 なんこ ありますか。  
 nanko arimasuka.

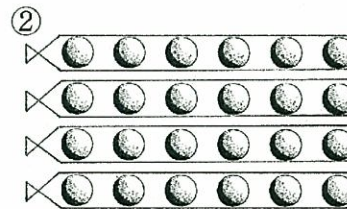
$$\square \times \square = \square$$

5



How many objects each in how many bags will  
 make how many?  
 Tig-ilang bagay sa ilang supot ay magiging  
 ilan lahat?

$$\square \times \square = \square$$

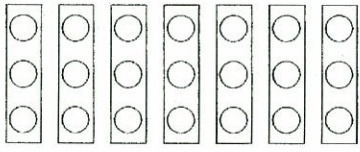


How many objects each in how many bags will  
 make how many?  
 Tig-ilang bagay sa ilang supot ay magiging  
 ilan lahat?

$$\square \times \square = \square$$

6

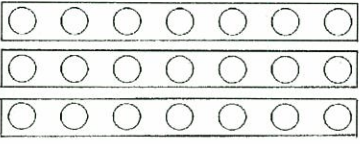
①



なんごずつ なんはこぶんで  
Nanko zutsu nanhako bun de  
なんこ ありますか。  
nanko arimasuka.

×  =

②

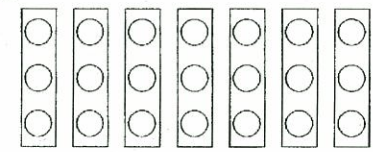


なんごずつ なんはこぶんで  
Nanko zutsu nanhako bun de  
なんこ ありますか。  
nanko arimasuka.

×  =

6

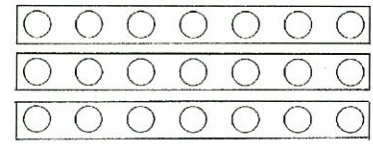
①



How many objects each in how many boxes will make how many?  
Tig-ilang bagay sa ilang kahon ay magiging ilan lahat?

×  =

②




How many objects each in how many boxes will make how many?  
Tig-ilang bagay sa ilang kahon ay magiging ilan lahat?

×  =

7

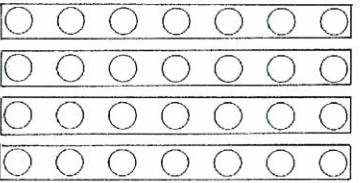
①



なんごずつ なんはこぶんで  
Nanko zutsu nanhako bun de  
なんこ ありますか。  
nanko arimasuka.

×  =

②

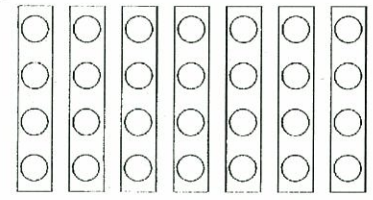


なんごずつ なんはこぶんで  
Nanko zutsu nanhako bun de  
なんこ ありますか。  
nanko arimasuka.

×  =

7

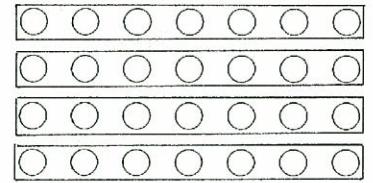
①



How many objects each in how many boxes will make how many?  
Tig-ilang bagay sa ilang kahon ay magiging ilan lahat?

×  =

②



How many objects each in how many boxes will make how many?  
Tig-ilang bagay sa ilang kahon ay magiging ilan lahat?

×  =